




My Money Primary Toolkit

Key Stage 2 Year 6 Unit 1:

Understanding My Money PSHE Activity sheet

Job Profiles

Use this information sheet to talk to the children about their answers after they have completed the Job Profiles activity sheet.

Chef 	Nurse 	Police officer 
<p>This is what you'll do and the skills you will need:</p> <ul style="list-style-type: none"> • Prepare food using variety of cooking skills. • Plan menus • Deal with suppliers • Manage budget • Cook tasty food • Know all about hygiene, health & safety • Able to multi-task • Time management • People management 	<p>This is what you'll do and the skills you will need:</p> <ul style="list-style-type: none"> • Plan and provide care for patients • Check temperatures and blood pressure • Give drugs and injections • Clean and dress wounds • Help with examinations • Empathetic • Caring • Able to multi-task 	<p>This is what you'll do and the skills you will need:</p> <ul style="list-style-type: none"> • Preserve order, prevent and investigate crime • Work with the public • Make enquiries • Give evidence in court • Attend accidents and fires • Diplomacy • Physical fitness • Knowledge of the law
<p>You will need these qualifications:</p> <ul style="list-style-type: none"> • Good basic education including GCSE's. • Further training through NVQ's diplomas recommended. 	<p>You will need these qualifications:</p> <ul style="list-style-type: none"> • Must have a nursing diplomas and/or nursing degree. 	<p>You will need these qualifications:</p> <ul style="list-style-type: none"> • Physically fit. • Satisfy security checks. • Good basic education. • Further training for NVQ's recommended.
<p>You could earn this much:</p> <ul style="list-style-type: none"> • Trainee chef starts at £12,000 a year. • Can rise to £30,000 + for a Head Chef in a top kitchen. 	<p>You could earn this much:</p> <ul style="list-style-type: none"> • Earn between £20,000- £26,000 a year. Rising to £60,000 for a nursing consultant. 	<p>You could earn this much:</p> <ul style="list-style-type: none"> • Start at £20,000 rising to £30,000 a year. Inspectors can earn £44,000 +
<p>Expect these working hours:</p> <ul style="list-style-type: none"> • Long hours • Split shifts • Weekend and evening work 	<p>Expect these working hours:</p> <ul style="list-style-type: none"> • 37.5 hours per week, can include weekends and evenings. 	<p>Expect these working hours:</p> <ul style="list-style-type: none"> • 40 hour week, shift system. Overtime often available.

My Money Primary Toolkit

Key Stage 2 Year 6 Unit 1:

Understanding My Money PSHE Activity sheet

Job Profiles

Would you like to be a chef? What do you think you would have to do and how much would you earn?


Read the profile below to find out more about the job.

Then fill in a similar profile for either a nurse or a police officer.

Chef

This is what you'll do and the skills you will need:

- Prepare food using a variety of cooking skills.
- Plan menus
- Deal with suppliers
- Manage budget
- Cook tasty food
- Know all about hygiene, health & safety
- Able to multi-task
- Time management
- People management



Nurse or Police Officer

This is what you'll do and the skills you will need:



You will need these qualifications:

- Good basic education including GCSE's.
- Further training through NVQ's diplomas recommended.

You will need these qualifications:

You could earn this much:

- Trainee chef starts at £12,000 a year.
- Can rise to £30,000 + for a Head Chef in a kitchen.

You could earn this much:

Expect these working hours:

- Long hours
- Split shifts
- Weekend and evening work

Expect these working hours:

My Money Primary Toolkit

Key Stage 2 Year 6 Unit 1:

Understanding My Money Mathematics Resource sheet

Salary connect-4 Job board

Annual salary: £29,106 Name: _____	Annual salary: £4,536 Name: _____	Annual salary: £27,000 Name: _____	Annual salary: £4,425.20 Name: _____
Annual salary: £10,080 Name: _____	Annual salary: £3,470.40 Name: _____	Annual salary: £14,705 Name: _____	Annual salary: £5,376 Name: _____
Annual salary: £5,120 Name: _____	Annual salary: £2,978.80 Name: _____	Annual salary: £22,990 Name: _____	Annual salary: £7,840.80 Name: _____

Job cards:



Jim is a nursery nurse.

Jim works 35 hours per week for £6 per hour, 48 weeks of the year.



Jeff is a plumber.

Jeff charges £125 per day and last year he worked 216 days.



Becky is an electrician.

Becky charges £147 per day and last year worked 198 days.



Penny is an accounts assistant.

Penny works 24 hours per week for £7 per hour for 32 weeks of the year.



Sanjit is a weekend chef.

Sanjit works 10 hours per week for £6.77 per hour for 44 weeks of the year.



Gail is a gardener.

Gail works 20 hours per week for £8 per hour, 32 weeks of the year.



Carlo is a carpenter.

Carlo charges £110 per day and last year he worked 209 days.



Monica is a part-time librarian.

Monica works 12 hours per week for £9 per hour, 42 weeks of the year.



Stan is a tour guide.

Stan works 30 hours per week for £7.23 per hour, 16 weeks of the year.



Bobby is a waiter.

Bobby works 27 hours per week for £6.05 per hour, 48 weeks of the year.



Abeer is an ice-cream seller.

Abeer works 37 hours per week for £5.98 per hour, 20 weeks of the year.



Debbie is a driver.

Debbie charges £85 per day and last year she worked 173 days.

My Money Primary Toolkit

Key Stage 2 Year 6 Unit 2:

My Money Works PSHE Resource sheet

Shopping Around

You are a keen runner and have just joined a sports club. You need new trainers. What could you write in the table below to help you make up your mind about which shoes to buy?



A pair of new trainers must have:	If possible, they should also have:
1.	
2.	
3.	

You want to make sure you have 'value for money'. Where could you look for a good deal?



How would you find out what is a reasonable price to pay?



What would you do if after you'd bought them you found the trainers didn't fit properly?



Some words are missing from the Fact File below. Write them in: 

Fact File: Know your consumer rights

- Don't accept anything that is faulty or that doesn't do what it says it does. It's your _____ to return it, and the shop _____ give you your money back.
- If something is wrong, the _____ must deal with the complaint. Don't let them pretend it is the manufacturer's _____
- Keep your receipt to _____ when you bought the item and how much you paid.

shop

right

fault

prove

must

What advice would you give to a nine year old who's desperate for a pair of 'heelies' (trainers with wheels under the heels)? She gets £3 pocket money each week and the shoes cost £35?



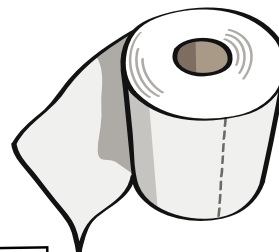
My Money Primary Toolkit

Key Stage 2 Year 6 Unit 2:

My Money Works Mathematics Resource sheet

Ready to roll

All these loo rolls are on sale in the supermarket:



**PACK OF 4
LOO ROLLS:
£2.80**

Pack of 12 loo rolls: £4.80

Pack of 4 loo rolls: £3.20
**SPECIAL OFFER:
Buy 1 pack,
get 1 free**

**Pack of 2
loo rolls:
£1.60**

Pack of 1 loo roll: **80p**
SPECIAL OFFER: SAVE 15% off this price

Pack of 5 loo rolls: £4
**SPECIAL OFFER:
SAVE 5% off this price**

Pack of 8 loo rolls: £4

**Pack of 2 loo rolls: £2.10
SPECIAL OFFER:
3 packs for the price of 2**

**Pack of 6 loo rolls:
£3.60**

**Pack of 1 loo roll: £1.10
SPECIAL OFFER:
SAVE 20% off this price**

Pack of 5 loo rolls: £3.25

**PACK OF 8 LOO ROLLS: £6
SPECIAL OFFER:
3 PACKS FOR THE PRICE OF 2**

**Pack of 4 loo rolls: £3
SPECIAL OFFER:
3 packs for the price of 2**

**Pack of 12 loo rolls:
£7.20
SPECIAL OFFER:
Buy 1 pack,
get 1 free**

**Pack of 2 loo rolls: £1.80
SPECIAL OFFER:
SAVE 10% off this price**

Questions:

1. Which are the best three offers?



2. Which three offers are the worst value for money?



3. Can you find any matching offers?



4. Which offer is the hardest to work out and why?



My Money Primary Toolkit

Key Stage 2 Year 6 Unit 3:

My Money Impact PSHE Resource sheet

How can I help my community?

Write five services /activities that are supported by taxes:

1. 

2.

3.

4.

5.

Write five services/activities that are supported by charities:

1. 

2.

3.

4.

5.



Write a top ten list of ways to give more to charity. Here are a few ideas to start you off

1. Volunteer to do something practical

2. Buy charity cards

3. Recycle ink cartridges for the charity

4. 

5.

6.

7.

8.

9.

10.

Twaddleton Council

Look at the pie chart. It shows the spending for Twaddleton Council.



Cut out and stick these labels on the segments of the pie chart to show how you think the budget should be spent.

Education

Children and families

Environment

Leisure

Roads and Transport

Other

Housing

Twaddleton Council



Spending cuts:
leisure gets the
smallest slice of the
pie.



Education joy!
Schools and
colleges get the
most money.



**Local children
and families
celebrate,** as
they get a third of
the total budget.



25% of spending
goes to housing.



**Roads and
transport set to
improve** as they
get a quarter of
the budget.



**Bad news for
housing,** as it
gets the smallest
amount of money.



**Go green!
Go wild!** The
environment gets
the biggest
proportion of this
year's spending.



10% of spending
to help with
housing.



Happy days!
One sixth of
spending for new
leisure centres
and parks.



**Local children
disappointed** as
only one sixth of
budget given to
children and
families.



Education to get
the second
smallest
proportion of
money. Can that
really be right?



**Almost no
money to go to
roads** and
transport this
year. They get the
smallest amount.



**Better than last
year:** One sixth of
council budget to
go to the
environment.



**Teachers
complain:** only a
tenth of spending
for education.



Leisure gets **10%**
of the money.



**A quarter of all
spending** goes to
children and
families.



Council gives the
smallest amount of
its budget to
'Other'. But what
is this spent on?



**Better than
expected:** a tenth
of spending for
the environment.



Family fury:
Children and
families only given
the second
smallest portion of
the budget.